

II SUMMATIVE EVALUATION 2017-18

SUBJECT: MATHS

STD-II DIV: _____

MARKS : 20

EXAM : NO: _____

SUPERVISOR SIGN: _____

DATE : _____

Q1. Fill in the blanks with the words given in the bracket. [3]

(Product, x, addition, subtraction)

- a) The sign of multiplication is _____.
- b) Multiplication is called as repeated _____ .
- c) The answer of multiplication is called _____.

Q2. Multiply the following. [2]

- a) 6 b) 5 c) 10 d) 2

X 4	X 4	X 10	X 3
_____	_____	_____	_____
_____	_____	_____	_____

Q3. Solve the following word problems. [4]


- a) Father planted 72 teak saplings, uncle planted 22. How many saplings did they plant together?

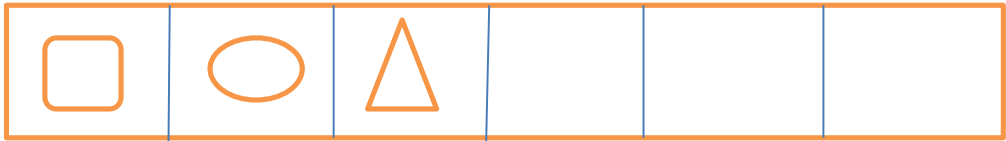
Ans:

b) Salma made 25 garlands .If Reshma made 32 garlands, how many more garlands did Reshma make than Salma?

Ans: _____

Q4. Complete the patterns. [2]

a) 

b) 

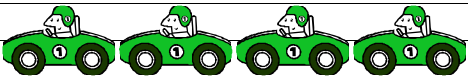
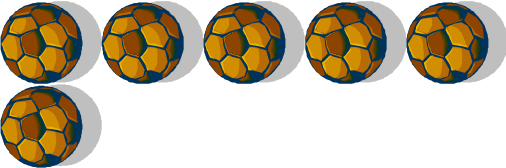

Q5. Match the following. [2]

- | | |
|-------------------|---------------|
| a) $8+8+8$ | 1) 12 |
| b) 3×4 | 2) 24 |
| c) Two fives are | 3) Forty five |
| d) Nine fives are | 4) Ten |

Ans a) _____ b) _____ c) _____ d) _____

Q6. Look at the table and write the answers.

[3]

Number of toys	Name of the children
	Shruti
	Soham
	Amol


1 Who has least no of toys? _____

2 If Amol has 2 teddy bears than Sohams has _____.

3 Shruti has _____

Q7. Look at the picture and fill in the blanks.

[4]



A) There are -----triangles.

B) There are----- rectangles.

C) There are----- circles.

D) There are----- squares.