








**Q 6. Solve the following word problems :**

Raju has 9 candies

He gave away 4 candies to Rita.

Total candies left with Raju.  $\longrightarrow$


(2)

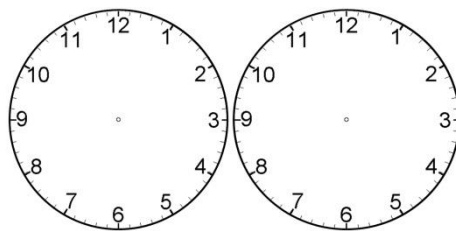
Flavor	No. of people
Vanilla	
Chocolate	
Strawberry	
Pineapple	
Peach	

(2)

(i) The most liked flavour- \_\_\_\_\_

(ii) Number of people liked Strawberry flavour - \_\_\_\_\_

**Q8. Draw the time given –**

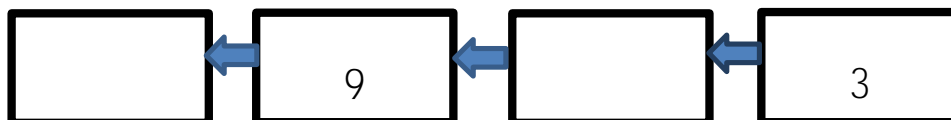


**9:00**

**4:30**

(2)


**Q 9. Count backwards by 3's–**



(1)

Q 10. Observe the calendar and answer the following questions :

(3)

<b>March</b>						
iprintcalendars.com						
2018 						
Sun	Mon	Tue	Wed	Thu	Fri	Sat
				1	2	3
4	5	6	7	8	9	10
11	12	13	14	15	16	17
18	19	20	21	22	23	24
25	26	27	28	29	30	31

Q1. Which month is shown in the above calendar?

Ans. \_\_\_\_\_.

Q2. Which dates fall on Monday?

Ans. \_\_\_\_\_.

Q3. How many Thursdays are there in the month of March 2018 ?

Ans. \_\_\_\_\_.

=====