

I SUMMATIVE ASSESSMENT 2017-18

Std :-I Div.:- _____ Sub.:- MATHS

Date:- 13-10-2017

Marks : - 20


Exam No.:- _____

Supervisor's Sign :- _____


Q1) Fill in the missing numbers :

(2)

(a) 49  51





(b) 98 





(c)  70

(d) 19 

Q2.(i) Write the consecutive numbers :

(1)

(a) 68 \Rightarrow  \Rightarrow  \Rightarrow  \Rightarrow 

(b) 43 \Rightarrow  \Rightarrow  \Rightarrow  \Rightarrow 

(ii) Write in numerals :-

(1)

(i) Thirteen- _____ (ii) Sixty - _____

(iii) Write the number names of :-

(a) 89 - _____


(1)

(b) 100 - _____

Q3. Add the following :

(a)  + _____ = _____

(4)

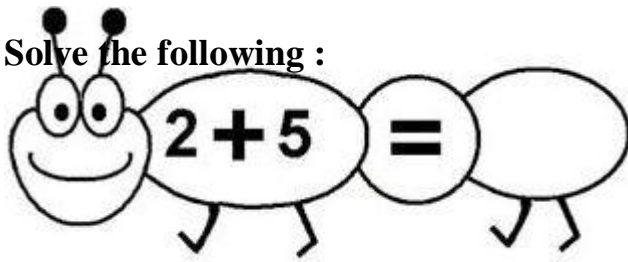
(b)  + _____ = _____

(c)
$$\begin{array}{r} 6 \\ + 0 \\ \hline \end{array}$$

(d)
$$\begin{array}{r} 8 \\ + 1 \\ \hline \end{array}$$

Q4. Solve the following :

(a)



(2)

(b) The sum of **2** and **0** is _____

Q5. Solve the following word problems :

(4)

(a) Sally has 5 pencils.

Mother gave her 2 more pencils.

Total pencils with Sally \longrightarrow

+	

(b) Rohan bought a book for Rupees 5





and a pen for Rupees 3.

Total paid by Rohan. \longrightarrow

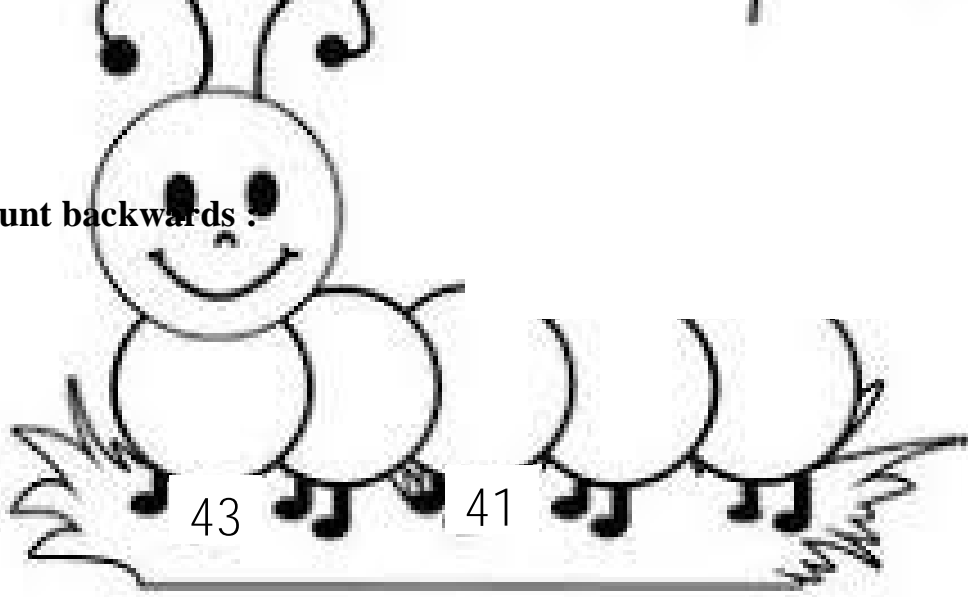
+	

Q6. Complete the following table :

(2)

Shape	Name	Sides
		
		
		
		

Q7. Count backwards .



(1)

Q8. Shade the correct matching shape :



(2)

