

I SUMMATIVE ASSESMENT 2017-18

DATE: 11 /10 /2017

SUBJECT: EVS

TIME: 1Hr

STD: I DIV : ____

MARKS: 20

EXAM NO: _____

SUPERVISOR'S SIGN: _____

Q1. Circle the names of animals

(1)

Cat, boy, clap, horse.

Q2. How many legs do these have?

(2)

1) Insects - _____

2) Birds - _____


Q3. Put the () for living things and (×) for non-living things

(2)


1)



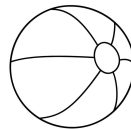
2)



3)



4)



Q4 . Choose the correct word from the bracket and fill in the blanks:

(3)

(fins, wild, frog, kiwi, living, insect)

1. Animals living in forest are called _____ animals.

2. _____ is a bird that cannot fly.

3. Fish can swim with the help of tail and _____.

4. An ant is a _____.

5. An animal that can live on land as well as in water _____.

6. Plants and animals are _____ things.

Q5. Write (T) for true and (F) for false.

(3)

1. All birds can fly. ()

2. Animals are use ful to us in many way. ()

3. Ant can fly. ()

4. Hen gives us eggs. ()

5. Fish have legs. ()

6. Lion is a pet animal. ()

Q6. Match the following.

(2)

1) Non living thing

a) cow

2) Big fish

b) Butterfly

3) Milk

c) shark

4) Insect

d) car

Q7. Name the following

(4)

a) Two birds - _____, _____

b) Two pet animals - _____, _____

c) Two farm animals - _____, _____

d) Animals that both on land and in water - _____, _____

Q8. Draw the following

(3)

a) One non living thing

b) one living thing

c) Insect

